

IUB Admission Test GAT / Post Graduate Past Papers

1

- [GAT Past paper Download Now](#)
- [NAT , GAT Test Syllabus | Outline | Pattern](#)
- [Take Live Demo Test Now](#)

For more information visit >>



Question **1**

Answer saved

Marked out of 1.00

🚩 Flag question

**Boat is to water therefore
Plane is to _____**

Select one:

IUBIANS

- ☐ Fly
- ☐ float
- ☒ Sky
- ☐ air
- ☐ oil

[Clear my choice](#)Question **2**

Answer saved

Marked out of 1.00

🚩 Flag question

**If 0.75: X :: 5:8, then X is
equal to ?**

Select one:

IUBIANS

- ☒ 1.2
- ☐ 1.30
- ☐ 1.12
- ☐ 1.25

[Clear my choice](#)**Next page****Previous page****Next page**

Protected with trial version of Visual Watermark. Full version doesn't put this mark.

Protected with trial version of Visual Watermark. Full version doesn't put this mark.

Question **3**

Answer saved

Marked out of 1.00

🚩 Flag question

Which number will come next 1, 2, 4, 8, 16, ____

IUB IANS

Select one:

- ☐ 20
- ☐ 24
- ☒ 32
- ☐ 28

[Clear my choice](#)[Previous page](#)[Next page](#)Protected with trial version of Visual Watermark. Full version doesn't put this mark.Question **5**

Answer saved

Marked out of 1.00

🚩 Flag question

He did not pay heed to my ____.

IUB IANS

Select one:

- ☒ advice
- ☐ advise

[Clear my choice](#)[Previous page](#)[Next page](#)Protected with trial version of Visual Watermark. Full version doesn't put this mark.



2-Group-1

Question 6

Answer saved

Marked out of 1.00

🚩 Flag question

They ___ playing hockey.

Select one:

IUBIANS

- ☐ been
- ☒ are
- ☐ will
- ☐ have

[Clear my choice](#)[Previous page](#)[Next page](#)**Question 7**

Answer saved

Marked out of 1.00

🚩 Flag question

Find the odd one from the given numbers. 2, 5, 10, 17, 26, 37, 50, 64**IUBIANS**

Select one:

- ☐ 17
- ☐ 37
- ☒ 64
- ☐ 26

[Clear my choice](#)[Previous page](#)[Next page](#)

**Question 8**

Answer saved

Marked out of 1.00

🚩 Flag question

They ____ that he had been
very rude to me. **IUBIANS**

Select one:

- ☒ concede
☐ accede

[Clear my choice](#)[Previous page](#)[Next page](#)Protected with trial version of Visual Watermark. Full version doesn't put this mark.**Question 9**

Answer saved

Marked out of 1.00

🚩 Flag question

A number called as x
increased by itself
(increased by $x+x$) **IUBIANS**
($x+5$) in it 5 gives 17.

What is the number ?

Select one:

- ☒ 6
☐ 4
☐ 5
☐ 7

[Clear my choice](#)Protected with trial version of Visual Watermark. Full version doesn't put this mark.

Question **10**

Answer saved

Marked out of 1.00

🚩 Flag question

Find the odd one from the given numbers. 3, 4, 10, 32, 136, 685, 4116

IUB IANS

Select one:

- ☒ 32
- ☐ 4116
- ☐ 136
- ☐ 10

[Clear my choice](#)Question **11**

Answer saved

Marked out of 1.00

🚩 Flag question

The ratio 35 : 84 in simplest form is:

IUB IANS

Select one:

- ☐ 7 : 12
- ☒ 5 : 12
- ☐ 5 : 7
- ☐ none of the mentioned choices

[Clear my choice](#)

Previous page

Next page

Previous page

Next page

Protected with trial version of Visual Watermark. Full version doesn't put this mark.

Protected with trial version of Visual Watermark. Full version doesn't put this mark.

Question **12**

Answer saved

Marked out of 1.00

🚩 Flag question

A polygon having 3 sides is known as:**IUB IANS**

Select one:

- ☐ Rectangle
- ☒ Triangle
- ☐ Quadrilateral
- ☐ Hexagon

[Clear my choice](#)[Previous page](#)[Next page](#)Protected with trial version of Visual Watermark. Full version doesn't put this mark.Question **13**

Answer saved

Marked out of 1.00

🚩 Flag question

Which number will come next 64, 32, 16, 8, _____**IUB IANS**

Select one:

- ☐ 0
- ☒ 4
- ☐ 2
- ☐ 1

[Clear my choice](#)[Previous page](#)[Next page](#)Protected with trial version of Visual Watermark. Full version doesn't put this mark.

Question **14**

Answer saved

Marked out of 1.00

🚩 Flag question

The girl is fond ____ music.

Select one:

IUB IANS

- ☐ to
- ☒ of
- ☐ in
- ☐ for

[Clear my choice](#)

Previous page

Next page

Protected with trial version of Visual Watermark. Full version doesn't put this mark.

Question **15**

Answer saved

Marked out of 1.00

🚩 Flag question

**America is the ____ country
in the world.**

Select one:

IUB IANS

- ☐ richer
- ☐ rich
- ☒ richest
- ☐ more rich

[Clear my choice](#)

Previous page

Next page

Protected with trial version of Visual Watermark. Full version doesn't put this mark.


Question **16**

Answer saved

Marked out of 1.00

🚩 Flag question

How many lines appear below?



Select one:

- ☐ 18
- ☐ 15
- ☐ 19
- ☐ 16
- ☒ 17

[Clear my choice](#)Question **17**

Answer saved

Marked out of 1.00

🚩 Flag question

**My teacher cautioned me
___ my spelling.**

IUB IANS

Select one:

- ☒ for
- ☐ against
- ☐ on
- ☐ at

[Clear my choice](#)[Previous page](#)[Next page](#)

Question **18**

Answer saved

Marked out of 1.00

🚩 Flag question

He went to Murree in the winter ____.

IUB IANS

Select one:

- ☐ vacation
- ☒ vocation

[Clear my choice](#)[Previous page](#)[Next page](#)Protected with trial version of Visual Watermark. Full version doesn't put this mark.Question **19**

Answer saved

Marked out of 1.00

🚩 Flag question

A shoe shop in RYK contain 25 pairs of shoes. If 20% are joggers, how many are not joggers?

IUB IANS

Select one:

- ☐ 15
- ☐ 10
- ☐ 5
- ☒ 20

[Clear my choice](#)[Previous page](#)[Next page](#)Protected with trial version of Visual Watermark. Full version doesn't put this mark.



In IUB there are 10 female employees with average age of 27 years. If there are 20 male employees and average age of all 30 employees of the firm is 31 years, what is the average age of male employees?

Select one:

IUB IANS

- ☐ 31 years
- ☒ 33 years
- ☐ 36 years
- ☐ 30 years

[Clear my choice](#)

Previous page

Next page

Protected with trial version of Visual Watermark. Full version doesn't put this mark.

Question **21**

Answer saved

Marked out of 1.00

🚩 Flag question

What will come next in following series, 10 70 11 67 13 64 16 61 ?

IUB IANS

Select one:

- ☒ 58,20
- ☐ 19,58
- ☐ 20,58
- ☐ 18,58

[Clear my choice](#)

Previous page

Next page

Protected with trial version of Visual Watermark. Full version doesn't put this mark.



2-Group-1

Question **22**

Answer saved

Marked out of 1.00

🚩 Flag question

What will get by ex **IUB IANS**
and simplify $(x - 5)(x + 4)$

Select one:

- ☐ $x^2 + 9x - 20$
- ☐ $x^2 - x - 9$
- ☐ $x^2 - x - 1$
- ☒ $x^2 - x - 20$

[Clear my choice](#)

Previous page

Next page

Protected with trial version of Visual Watermark. Full version doesn't put this mark.

Question **23**

Answer saved

Marked out of 1.00

🚩 Flag question

He belongs ___ a family of
aristocrats

Select one:

IUB IANS

- ☐ for
- ☒ to
- ☐ from
- ☐ None of the mentioned
choices
- ☐ down

[Clear my choice](#)

Previous page

Next page

Protected with trial version of Visual Watermark. Full version doesn't put this mark.

Question **24**

Answer saved

Marked out of 1.00

🚩 Flag question

If it takes 5 minutes to boil a single egg. How many minutes will it take to boil 7 eggs together?

IUB IANS

Select one:

- ☐ 7 minutes
- ☐ 2 minutes
- ☐ 20 minutes
- ☒ 5 minutes

[Clear my choice](#)[Previous page](#)[Next page](#)

Protected with trial version of Visual Watermark. Full version doesn't put this mark.

IUB GAT General Previous Paper
2-Group-1

Question **27**

Not yet answered

Marked out of 1.00

🚩 Flag question

He is a good ____ to film industry.

IUB IANS

Select one:

- ☒ edition
- ☐ addition

[Clear my choice](#)[Previous page](#)[Next page](#)

Protected with trial version of Visual Watermark. Full version doesn't put this mark.

Question **28**

Not yet answered

Marked out of 1.00

🚩 Flag question

A , E , J , P , __?

Select one:

IUB IANS

- ☐ X
- ☐ Z
- ☐ S
- ☐ W

Previous page

Next page

Protected with trial version of Visual Watermark. Full version doesn't put this mark.

Question **29**

Not yet answered

Marked out of 1.00

🚩 Flag question

If 8 is to 4 , then 10 is to ____

Select one:

IUB IANS

- ☐ 7
- ☐ 3
- ☐ 6
- ☒ 5

[Clear my choice](#)

Previous page

Next page

Protected with trial version of Visual Watermark. Full version doesn't put this mark.



IUB GAT General Previous Paper 2-Group-1

Question **30**

Not yet answered

Marked out of 1.00

🚩 Flag question

Can you tell me ____ the station is?

Select one:

- ☐ wear
- ☐ None of the mentioned choices
- ☐ were
- ☒ where

[Clear my choice](#)

Previous page

Next page

Protected with trial version of Visual Watermark. Full version doesn't put this mark.

Question **31**

Not yet answered

Marked out of 1.00

🚩 Flag question

Average of three numbers is 15. What is the sum of the three numbers?

Select one:

- ☒ 45
- ☐ 5
- ☐ 10
- ☐ 36

[Clear my choice](#)

Previous page

Next page

Protected with trial version of Visual Watermark. Full version doesn't put this mark.



MS/MPhil)-Batch- 2-Group-1

Question 32

Not yet answered

Marked out of 1.00

🚩 Flag question

If the sum of three numbers is 93, then the average of numbers will be —?

IUB IANS

Select one:

- ☐ 21
- ☐ 22
- ☐ 51
- ☒ 31

[Clear my choice](#)[Previous page](#)[Next page](#)Protected with trial version of Visual Watermark. Full version doesn't put this mark.**Question 33**

Not yet answered

Marked out of 1.00

🚩 Flag question

IUB IANS

7 : 12 is equivalent to:

Select one:

- ☐ 42 : 71
- ☐ 28 : 40
- ☐ 72 : 42
- ☒ 42 : 72

[Clear my choice](#)[Previous page](#)[Next page](#)Protected with trial version of Visual Watermark. Full version doesn't put this mark.



Test (Post Graduate MS/MPhil)-Batch-2-Group-1

Question 34

Answer saved

Marked out of 1.00



🚩 Flag question

If you add 1000 to 29898, you obtain

Select one:

- ☐ 29908
- ☐ 30898
- ☒ 39898
- ☐ 29998

[Clear my choice](#)Protected with trial version of Visual Watermark. Full version doesn't put this mark**Question 36**

Not yet answered

Marked out of 1.00

🚩 Flag question

I ____ on this website since 6 O'clock in the morning.



Select one:

- ☐ has working
- ☐ have worked
- ☒ have been working
- ☐ will have work

[Clear my choice](#)Protected with trial version of Visual Watermark. Full version doesn't put this mark



2-Group-1

Question **37**

Not yet answered

Marked out of 1.00

🚩 Flag question

The jasmine gives its
fragrance at night . IUB IANS

Select one:

- ☐ up
- ☐ in
- ☐ at
- ☒ off

[Clear my choice](#)

Previous page

Next page

Protected with trial version of Visual Watermark. Full version doesn't put this mark.

Question **38**

Not yet answered

Marked out of 1.00

🚩 Flag question

What is 50% of 250? IUB IANS

Select one:

- ☒ 125
- ☐ 25
- ☐ 50
- ☐ 250

[Clear my choice](#)

Protected with trial version of Visual Watermark. Full version doesn't put this mark.

Question **39**

Not yet answered

Marked out of 1.00

🚩 Flag question

Average of A, B and C is 32 and average of A and B is 30. What is the value of C?

IUBIANS

Select one:

- ☐ 38
- ☐ 34
- ☒ 36
- ☐ 35

[Clear my choice](#)[Previous page](#)[Next page](#)Protected with trial version of Visual Watermark. Full version doesn't put this mark.Question **40**

Not yet answered

Marked out of 1.00

🚩 Flag question

I ____ lost the watch.

IUBIANS

Select one:

- ☐ am
- ☐ will
- ☐ do
- ☒ have

[Clear my choice](#)Protected with trial version of Visual Watermark. Full version doesn't put this mark.

**Question 41**

Not yet answered

Marked out of 1.00

🚩 Flag question

Find the word which is same or similar in meaning to "INVARIABLE".

IUB IANS

Select one:

- ☐ Fleeting
- ☐ Uniform
- ☐ Diverse
- ☐ Eternal

Previous page

Next page

Question 42

Not yet answered

Marked out of 1.00

🚩 Flag question

The average age in a city of 10,000 is 40 years. The average of half of them is 50 years. The average of remaining ones is.

IUB IANS

Select one:

- ☐ 25
- ☐ 35
- ☐ 15
- ☐ 30

Previous page

Next page

Quiz navigation

1

2

3

4

5

6

Question **43**

Not yet answered

Marked out of 1.00

🚩 Flag question

The average weight of the class of 35 students was 45 kg. With the admission of a new student the average weight came down to 44 kg. Find the weight of new student.

Select one:

- ☐ 30 kg
- ☐ 25 kg
- ☐ 45 kg
- ☐ 27 kg

Previous page

Next page

MS/MPhil)-Batch-2-Group-1

Question **44**

Not yet answered

Marked out of 1.00

🚩 Flag question

Which number will come next 2, 20, 74, 110, __

Select one:

- ☐ 114
- ☐ 132
- ☐ 115
- ☐ 182

Previous page

Next page

**Question 45**

Not yet answered

Marked out of 1.00

🚩 Flag question

Ahmed and his wife has seven daughters and ~~one~~ daughter has one brother. How many people are there in the Ahmed's family (total) ?

Select one:

- ☐ 5
- ☐ 15
- ☐ 10
- ☐ 20

Protected with trial version of Visual Watermark. Full version doesn't put this mark.**Question 46**

Not yet answered

Marked out of 1.00

🚩 Flag question

It began to dawn ___ me that murder was right in our midst.

IUBIANS

Select one:

- ☐ about
- ☐ on
- ☐ at
- ☐ upon

[Previous page](#)[Next page](#)Protected with trial version of Visual Watermark. Full version doesn't put this mark.



Test (Post
Graduate
MS/MPhil)-Batch-
2-Group-1

Test (Post
Graduate
MS/MPhil)-Batch-
2-Group-1

<p>Question 47 Not yet answered Marked out of 1.00 IUBIANS Flag question</p> <p>Binary (Synonym , Same or Similar Meaning)</p> <p>Select one:</p> <ul style="list-style-type: none"><input type="radio"/> Complicated<input type="radio"/> None of the mentioned choices<input type="radio"/> Binding force<input type="radio"/> Two things	<p>Question 49 Not yet answered Marked out of 1.00 IUBIANS Flag question</p> <p>You should ____ yourself to the circumstances.</p> <p>Select one:</p> <ul style="list-style-type: none"><input type="radio"/> Adopt<input type="radio"/> Adapt <p>Previous page Next page</p>
---	---

ected with trial version of Visual Watermark. Full version doesn't put this mark



IUBIANS

IUB GAT General Previous Paper

Quiz navigation

1	2	3	4	5	6
7	8	9	10	11	12
13	14	15	16	17	18
19	20	21	22	23	24
25	26	27	28	29	30
31	32	33	34	35	36
37	38	39	40	41	42
43	44	45	46	47	48
49	50				

IUB IANS

[Finish attempt ...](#)

Time left **0:03:20**

Protected with trial version of Visual Watermark. Full version doesn't put this mark.

IUB Admission Test GAT / Post Graduate Past Papers

2

- [GAT Past paper Download Now](#)
- [NAT , GAT Test Syllabus | Outline | Pattern](#)
- [Take Live Demo Test Now](#)

For more information visit >>



Question 1

Answer saved

Marked out of
1.00

Flag question

Choose the word with correct spelling.

Select one:

- ☒ Merchandise
- ☐ Murchandize
- ☐ Merchandise
- ☐ Merchendese

[Clear my choice](#)



Next page

Quiz navigation

1	2	3	4	5	6	7	8	9	10	11	12	13	14	15	16	17	18	19	20
21	22	23	24	25	26	27	28	29	30	31	32	33	34	35	36	37	38	39	40
41	42	43	44	45	46	47	48	49	50										

[Finish attempt ...](#)

Time left **0:54:49**

Question **2**

Answer saved

Marked out of
1.00

🚩 Flag question

Find the correctly spelt word ?

Select one:

- ☐ Sarvent
- ☐ Sarvant
- ☐ Servent
- ☒ Servant

[Clear my choice](#)



[Previous page](#)

[Next page](#)

Quiz navigation

1	2	3	4	5	6	7	8	9	10	11	12	13	14	15	16	17	18	19	20
21	22	23	24	25	26	27	28	29	30	31	32	33	34	35	36	37	38	39	40
41	42	43	44	45	46	47	48	49	50										

[Finish attempt ...](#)

Time left **0:54:37**

Question **3**

Answer saved

Marked out of
1.00

🚩 Flag question

Choose the word with correct spelling.

Select one:

- ☒ Exclusive
- ☐ Execulsive
- ☐ Axclusive
- ☐ Exclosive



[Clear my choice](#)

Previous page

Next page

Quiz navigation

1	2	3	4	5	6	7	8	9	10	11	12	13	14	15	16	17	18	19	20
21	22	23	24	25	26	27	28	29	30	31	32	33	34	35	36	37	38	39	40
41	42	43	44	45	46	47	48	49	50										

[Finish attempt ...](#)

Time left **0:54:30**

Question **4**

Answer saved

Marked out of
1.00

🚩 Flag question

Pick the word with correct spelling from below given choices

Select one:

- ☐ Reconcille
- ☒ Reconcile
- ☐ Recancile
- ☐ Reconsile



[Clear my choice](#)

Previous page

Next page

Quiz navigation

1	2	3	4	5	6	7	8	9	10	11	12	13	14	15	16	17	18	19	20
21	22	23	24	25	26	27	28	29	30	31	32	33	34	35	36	37	38	39	40
41	42	43	44	45	46	47	48	49	50										

[Finish attempt ...](#)

Time left **0:54:22**

Question **5**

Not yet
answered

Marked out of
1.00

🚩 Flag question

Mr.Ali is an _____ of the school board. ?

Select one:

- ☐ None of the mentioned choices
- ☐ Acquintence
- ☐ Acquintance
- ☐ Acquaintance



[Previous page](#)

[Next page](#)

Quiz navigation

1	2	3	4	5	6	7	8	9	10	11	12	13	14	15	16	17	18	19	20
21	22	23	24	25	26	27	28	29	30	31	32	33	34	35	36	37	38	39	40
41	42	43	44	45	46	47	48	49	50										

[Finish attempt ...](#)

Time left **0:54:13**

Question **6**

Not yet
answered

Marked out of
1.00

🚩 Flag question

Spot the correct spelling ?

Select one:

- ☐ Committee
- ☐ Committey
- ☐ Commitee
- ☐ Comittee



[Previous page](#)

[Next page](#)

Quiz navigation

1	2	3	4	5	6	7	8	9	10	11	12	13	14	15	16	17	18	19	20
21	22	23	24	25	26	27	28	29	30	31	32	33	34	35	36	37	38	39	40
41	42	43	44	45	46	47	48	49	50										

[Finish attempt ...](#)

Time left **0:52:59**

Question **9**

Not yet
answered

Marked out of
1.00

🚩 Flag question

Make haste ____ we shall miss the train.

Select one:

- ☐ else
- ☐ so that
- ☒ or
- ☐ either

[Clear my choice](#)



[Previous page](#)

[Next page](#)

Quiz navigation

1	2	3	4	5	6	7	8	9	10	11	12	13	14	15	16	17	18	19	20
21	22	23	24	25	26	27	28	29	30	31	32	33	34	35	36	37	38	39	40
41	42	43	44	45	46	47	48	49	50										

[Finish attempt ...](#)

Time left **0:49:53**

Question **8**

Not yet
answered

Marked out of
1.00

🚩 Flag question

The discussion was held ____ till the meeting ?

Select one:

- ☒ over
☐ on
☐ with
☐ in

[Clear my choice](#)



[Previous page](#)

[Next page](#)

Quiz navigation

1	2	3	4	5	6	7	8	9	10	11	12	13	14	15	16	17	18	19	20
21	22	23	24	25	26	27	28	29	30	31	32	33	34	35	36	37	38	39	40
41	42	43	44	45	46	47	48	49	50										

Not yet answered

[Finish attempt ...](#)

Time left **0:50:41**

Question **10**

Not yet
answered

Marked out of
1.00

🚩 Flag question

I am writing this essay ____ blue ink.

Select one:

☐ with

☒ in

☐ from

☐ on

[Clear my choice](#)



[Previous page](#)

[Next page](#)

Quiz navigation

1	2	3	4	5	6	7	8	9	10	11	12	13	14	15	16	17	18	19	20
21	22	23	24	25	26	27	28	29	30	31	32	33	34	35	36	37	38	39	40
41	42	43	44	45	46	47	48	49	50										

[Finish attempt ...](#)

Time left **0:49:21**

Question **11**

Not yet
answered

Marked out of
1.00

🚩 Flag question

I was amazed ____ his misbehavior.

Select one:

- ☐ with
- ☐ for
- ☒ at
- ☐ in



[Clear my choice](#)

[Previous page](#)

[Next page](#)

Quiz navigation

1	2	3	4	5	6	7	8	9	10	11	12	13	14	15	16	17	18	19	20
21	22	23	24	25	26	27	28	29	30	31	32	33	34	35	36	37	38	39	40
41	42	43	44	45	46	47	48	49	50										

[Finish attempt ...](#)

Time left **0:48:53**

Question **11**

Not yet
answered

Marked out of
1.00

🚩 Flag question

I was amazed ____ his misbehavior.

Select one:

- ☐ with
- ☐ for
- ☒ at
- ☐ in



[Clear my choice](#)

[Previous page](#)

[Next page](#)

Quiz navigation

1	2	3	4	5	6	7	8	9	10	11	12	13	14	15	16	17	18	19	20
21	22	23	24	25	26	27	28	29	30	31	32	33	34	35	36	37	38	39	40
41	42	43	44	45	46	47	48	49	50										

[Finish attempt ...](#)

Time left **0:48:44**

Question **12**

Not yet
answered

Marked out of
1.00

🚩 Flag question

It began to dawn ____ me that murder was right in our midst .

Select one:

- ☒ on
☐ upon
☐ at
☐ about

[Clear my choice](#)



[Previous page](#)

[Next page](#)

Quiz navigation

1	2	3	4	5	6	7	8	9	10	11	12	13	14	15	16	17	18	19	20
21	22	23	24	25	26	27	28	29	30	31	32	33	34	35	36	37	38	39	40
41	42	43	44	45	46	47	48	49	50										

[Finish attempt ...](#)

Time left **0:48:11**

Question **13**

Not yet
answered

Marked out of
1.00

🚩 Flag question

My teacher cautioned me ____ my spelling.

Select one:

- ☒ for
☐ at
☐ on
☐ against

[Clear my choice](#)



[Previous page](#)

[Next page](#)

Quiz navigation

1	2	3	4	5	6	7	8	9	10	11	12	13	14	15	16	17	18	19	20
21	22	23	24	25	26	27	28	29	30	31	32	33	34	35	36	37	38	39	40
41	42	43	44	45	46	47	48	49	50										

[Finish attempt ...](#)

Time left **0:47:33**

Question **14**

Not yet
answered

Marked out of
1.00

🚩 Flag question

Cats sleep ___ day and move out at night .

Select one:

- ☐ in
- ☐ for
- ☒ during
- ☐ at

[Clear my choice](#)



[Previous page](#)

[Next page](#)

Quiz navigation

1	2	3	4	5	6	7	8	9	10	11	12	13	14	15	16	17	18	19	20
21	22	23	24	25	26	27	28	29	30	31	32	33	34	35	36	37	38	39	40
41	42	43	44	45	46	47	48	49	50										

[Finish attempt ...](#)

Time left **0:46:51**

Question **15**

Not yet
answered

Marked out of
1.00

🚩 Flag question

They have ____ the poem.

Select one:

- ☐ teaching
- ☐ teach
- ☐ taught
- ☐ teached



Previous page

Next page

Quiz navigation

1	2	3	4	5	6	7	8	9	10	11	12	13	14	15	16	17	18	19	20
21	22	23	24	25	26	27	28	29	30	31	32	33	34	35	36	37	38	39	40
41	42	43	44	45	46	47	48	49	50										

[Finish attempt ...](#)

Time left **0:45:51**

Question **16**

Not yet
answered

Marked out of
1.00

🚩 Flag question

You can take tea if you ____ .

Select one:

- ☐ liked
- ☐ like
- ☐ will like
- ☐ is liking



Previous page

Next page

Quiz navigation

1	2	3	4	5	6	7	8	9	10	11	12	13	14	15	16	17	18	19	20
21	22	23	24	25	26	27	28	29	30	31	32	33	34	35	36	37	38	39	40
41	42	43	44	45	46	47	48	49	50										

[Finish attempt ...](#)

Time left **0:45:04**

Question **17**

Not yet
answered

Marked out of
1.00

🚩 Flag question

I did not ____ fun of him.

Select one:

- ☐ making
- ☐ make
- ☐ none of the mentioned choices
- ☐ made



Previous page

Next page

Quiz navigation

1	2	3	4	5	6	7	8	9	10	11	12	13	14	15	16	17	18	19	20
21	22	23	24	25	26	27	28	29	30	31	32	33	34	35	36	37	38	39	40
41	42	43	44	45	46	47	48	49	50										

[Finish attempt ...](#)

Time left **0:44:06**

Question **18**

Not yet
answered

Marked out of
1.00

🚩 Flag question

Look! That man ---- to open the door of your car.

Select one:

- ☒ is trying
- ☐ tries
- ☐ has been trying
- ☐ tried



[Clear my choice](#)

[Previous page](#)

[Next page](#)

Quiz navigation

1	2	3	4	5	6	7	8	9	10	11	12	13	14	15	16	17	18	19	20
21	22	23	24	25	26	27	28	29	30	31	32	33	34	35	36	37	38	39	40
41	42	43	44	45	46	47	48	49	50										

[Finish attempt ...](#)

Time left **0:43:32**

Question **19**

Answer saved

Marked out of
1.00

🚩 Flag question

My sister has four ____.

Select one:

- ☐ childrens
- ☒ childs
- ☐ children
- ☐ child

[Clear my choice](#)



Previous page

Next page

Quiz navigation

1	2	3	4	5	6	7	8	9	10	11	12	13	14	15	16	17	18	19	20
21	22	23	24	25	26	27	28	29	30	31	32	33	34	35	36	37	38	39	40
41	42	43	44	45	46	47	48	49	50										

[Finish attempt ...](#)

Time left **0:40:35**

Question **20**

Answer saved

Marked out of
1.00

🚩 Flag question

Select the right choice that will replace the question mark in series Z Y X , W V U , ? , Q P O

Select one:

☐ U T R

☐ S T R

☐ R T S

☒ T S R

[Clear my choice](#)



Previous page

Next page

Quiz navigation

1	2	3	4	5	6	7	8	9	10	11	12	13	14	15	16	17	18	19	20
21	22	23	24	25	26	27	28	29	30	31	32	33	34	35	36	37	38	39	40
41	42	43	44	45	46	47	48	49	50										

[Finish attempt ...](#)

Time left **0:38:35**

Question **21**

Not yet
answered

Marked out of
1.00

🚩 Flag question

What two numbers should come next in series 10 , 30 , 32 , 96 , 98 , 294 , 286 , __ , ?

Select one:

- ☐ 572, 574
- ☐ 777, 890
- ☒ 888, 890
- ☐ 858, 860



[Clear my choice](#)

[Previous page](#)

[Next page](#)

Quiz navigation

1	2	3	4	5	6	7	8	9	10	11	12	13	14	15	16	17	18	19	20
21	22	23	24	25	26	27	28	29	30	31	32	33	34	35	36	37	38	39	40
41	42	43	44	45	46	47	48	49	50										

[Finish attempt ...](#)

Time left **0:37:28**

Question **22**

Not yet
answered

Marked out of
1.00

🚩 Flag question

Which one is the odd number (different from other) in given series 3 , 5 , 7 , 9 , 11 , 13

Select one:

☐ 7

☐ 5

☐ 11

☐ 13

☒ 9

☐ 3

[Clear my choice](#)



Previous page

Next page

Quiz navigation

1	2	3	4	5	6	7	8	9	10	11	12	13	14	15	16	17	18	19	20
21	22	23	24	25	26	27	28	29	30	31	32	33	34	35	36	37	38	39	40
41	42	43	44	45	46	47	48	49	50										

[Finish attempt ...](#)

Question **23**

Not yet
answered

Marked out of
1.00

🚩 Flag question

Which number will come in series , 0 , 1 , 2 , 4 , 6 , 9 , 12 , 16 , __ ?

Select one:

- ☐ 17
- ☐ 20
- ☐ 19
- ☐ 18



Previous page

Next page

Quiz navigation

1	2	3	4	5	6	7	8	9	10	11	12	13	14	15	16	17	18	19	20
21	22	23	24	25	26	27	28	29	30	31	32	33	34	35	36	37	38	39	40
41	42	43	44	45	46	47	48	49	50										

[Finish attempt ...](#)

Time left **0:34:32**

Question **24**

Not yet
answered

Marked out of
1.00

🚩 Flag question

Which number will come next 64, 32, 16, 8, ____

Select one:

- ☐ 1
- ☐ 2
- ☒ 4
- ☐ 0



[Clear my choice](#)

Previous page

Next page

Quiz navigation

1	2	3	4	5	6	7	8	9	10	11	12	13	14	15	16	17	18	19	20
21	22	23	24	25	26	27	28	29	30	31	32	33	34	35	36	37	38	39	40
41	42	43	44	45	46	47	48	49	50										

[Finish attempt ...](#)

Time left **0:32:56**

Question **25**

Not yet
answered

Marked out of
1.00

🚩 Flag question

Which one (different) is the odd number in given series 3 , 5 , 7 , 9 , 11 , 13

Select one:

- ☐ 13
- ☐ 7
- ☐ 11
- ☐ 5
- ☐ 3
- ☒ 9



[Clear my choice](#)

[Previous page](#)

[Next page](#)

Quiz navigation

1	2	3	4	5	6	7	8	9	10	11	12	13	14	15	16	17	18	19	20
21	22	23	24	25	26	27	28	29	30	31	32	33	34	35	36	37	38	39	40
41	42	43	44	45	46	47	48	49	50										

[Finish attempt ...](#)

Time left **0:52:38**

Question **26**

Not yet
answered

Marked out of
1.00

🚩 Flag question

A, E, J, P, __

Select one:

☒ W

☐ Z

☐ X

☐ S

[Clear my choice](#)



[Previous page](#)

[Next page](#)

Quiz navigation

1	2	3	4	5	6	7	8	9	10	11	12	13	14	15	16	17	18	19	20
21	22	23	24	25	26	27	28	29	30	31	32	33	34	35	36	37	38	39	40
41	42	43	44	45	46	47	48	49	50										

[Finish attempt ...](#)

Time left **0:51:49**

Question **27**

Not yet
answered

Marked out of
1.00

🚩 Flag question

$$3.1469 + 6.837 + ? = 15$$

Select one:

- ☐ 24.9839
- ☐ 5.7634
- ☒ 5.0161
- ☐ 5.0169



[Clear my choice](#)

Previous page

Next page

Quiz navigation

1	2	3	4	5	6	7	8	9	10	11	12	13	14	15	16	17	18	19	20
21	22	23	24	25	26	27	28	29	30	31	32	33	34	35	36	37	38	39	40
41	42	43	44	45	46	47	48	49	50										

[Finish attempt ...](#)

Time left **0:50:39**

Question **28**

Not yet
answered

Marked out of
1.00

🚩 Flag question

0.009 + ____ = 0.918 ? (Sum)

Select one:

☐ .009

☒ .909

☐ 9

☐ .09

[Clear my choice](#)



[Previous page](#)

[Next page](#)

Quiz navigation

1	2	3	4	5	6	7	8	9	10	11	12	13	14	15	16	17	18	19	20
21	22	23	24	25	26	27	28	29	30	31	32	33	34	35	36	37	38	39	40
41	42	43	44	45	46	47	48	49	50										

[Finish attempt ...](#)

Time left **0:48:39**

Question **29**

Not yet
answered

Marked out of
1.00

🚩 Flag question

$$0.004 \times 0.5 = ?$$

Select one:

- ☐ 0.0002
- ☐ None of the mentioned choices
- ☐ 0.02
- ☒ 0.002

[Clear my choice](#)

iubians.com

Previous page

Next page

Quiz navigation

1	2	3	4	5	6	7	8	9	10	11	12	13	14	15	16	17	18	19	20
21	22	23	24	25	26	27	28	29	30	31	32	33	34	35	36	37	38	39	40
41	42	43	44	45	46	47	48	49	50										

[Finish attempt ...](#)

Time left **0:48:15**

Question **30**

Not yet
answered

Marked out of
1.00

Flag question

$$4211.01 + 22.261 - ? = 2645.759$$

Select one:

- ☒ 1587.512
- ☐ 1586.422
- ☐ 1586.532
- ☐ 1588.021

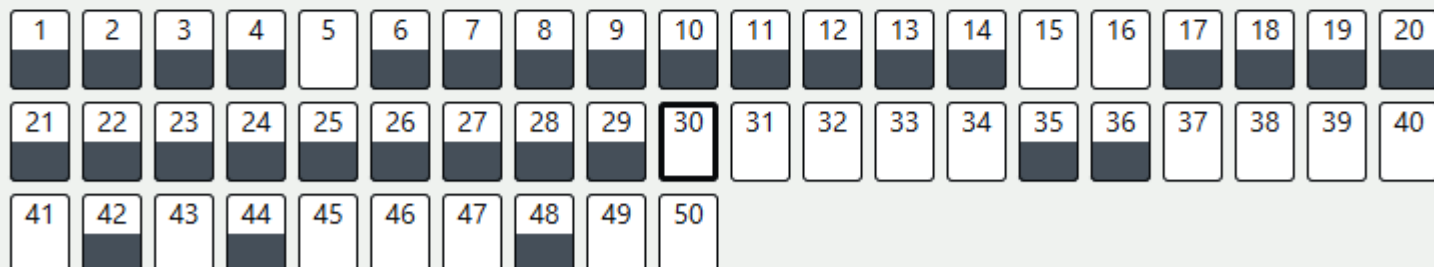


[Clear my choice](#)

[Previous page](#)

[Next page](#)

Quiz navigation



[Finish attempt ...](#)

Time left **0:47:21**

Question **31**

Not yet
answered

Marked out of
1.00

🚩 Flag question

$2 \times ? - 6 = 676 / 26$ What will come in place of question mark ?

Select one:

☐ 15/26

☐ 9

☐ 26

☒ 16

[Clear my choice](#)



[Previous page](#)

[Next page](#)

Quiz navigation

1	2	3	4	5	6	7	8	9	10	11	12	13	14	15	16	17	18	19	20
21	22	23	24	25	26	27	28	29	30	31	32	33	34	35	36	37	38	39	40
41	42	43	44	45	46	47	48	49	50										

[Finish attempt ...](#)

Time left **0:45:43**

Question **32**

Not yet
answered

Marked out of
1.00

🚩 Flag question

What is median of 87, 62, 55, 48, 55, 35, 64, 91 and 59?

Select one:

- ☐ 62
- ☐ 55
- ☐ 59
- ☐ 48



Previous page

Next page

Quiz navigation

1	2	3	4	5	6	7	8	9	10	11	12	13	14	15	16	17	18	19	20
21	22	23	24	25	26	27	28	29	30	31	32	33	34	35	36	37	38	39	40
41	42	43	44	45	46	47	48	49	50										

[Finish attempt ...](#)

Time left **0:42:27**

Question **33**

Answer saved

Marked out of
1.00

🚩 Flag question

What is the average of 8,13,25,43 and 11?

Select one:

☐ 27

☒ 20

☐ 32

☐ 19

[Clear my choice](#)



[Previous page](#)

[Next page](#)

Quiz navigation

1	2	3	4	5	6	7	8	9	10	11	12	13	14	15	16	17	18	19	20
21	22	23	24	25	26	27	28	29	30	31	32	33	34	35	36	37	38	39	40
41	42	43	44	45	46	47	48	49	50										

[Finish attempt ...](#)

Time left **0:42:17**

Question **34**

Not yet
answered

Marked out of
1.00

Flag question

Average of 8 numbers is 31, seven of them are 15,45,17,19,33,48,65. What is the eighth number?

Select one:

☐ 34

☒ 6

☐ 23

☐ 15

[Clear my choice](#)



[Previous page](#)

[Next page](#)

Quiz navigation

1	2	3	4	5	6	7	8	9	10	11	12	13	14	15	16	17	18	19	20
21	22	23	24	25	26	27	28	29	30	31	32	33	34	35	36	37	38	39	40
41	42	43	44	45	46	47	48	49	50										

[Finish attempt ...](#)

Time left **0:41:30**

Question **35**

Answer saved

Marked out of
1.00

🚩 Flag question

What is mode of 52,50,52,18,7,2,3,18,5,7,5,3,2,2,2?

Select one:

- ☐ 1
- ☐ 7
- ☐ 18
- ☒ 2

[Clear my choice](#)



[Previous page](#)

[Next page](#)

Quiz navigation

1	2	3	4	5	6	7	8	9	10	11	12	13	14	15	16	17	18	19	20
21	22	23	24	25	26	27	28	29	30	31	32	33	34	35	36	37	38	39	40
41	42	43	44	45	46	47	48	49	50										

Answer saved

[Finish attempt ...](#)

Time left **0:41:12**

Question 36

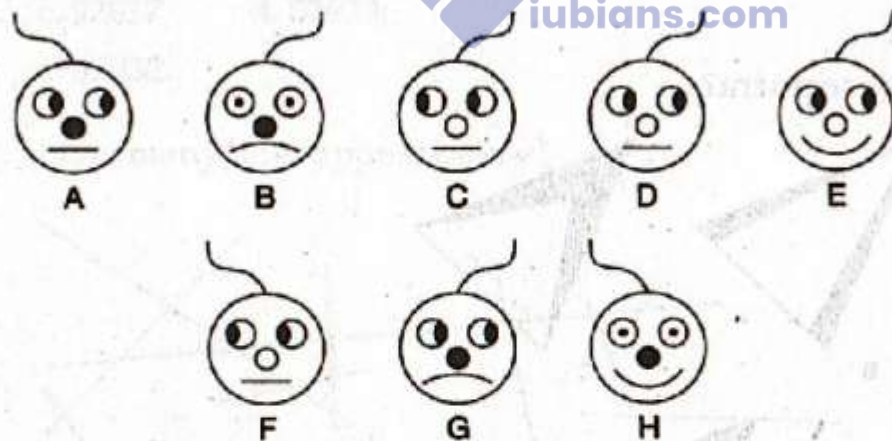
Answer saved

Marked out of
1.00

Flag question



What comes next?



Select one:

- ☐ H
- ☒ E
- ☐ B
- ☐ A
- ☐ C
- ☐ F
- ☐ D
- ☐ G

Question 37

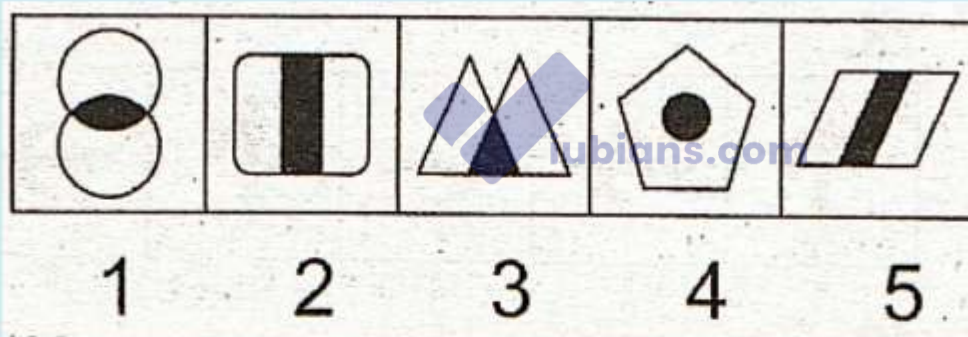
Not yet
answered

Marked out of
1.00

Flag question

One figure is not like the other four.

Choose the figure which is different from the rest .



Select one:

- ☐ 4
- ☐ 1
- ☐ 2
- ☐ 3
- ☐ 5

Previous page

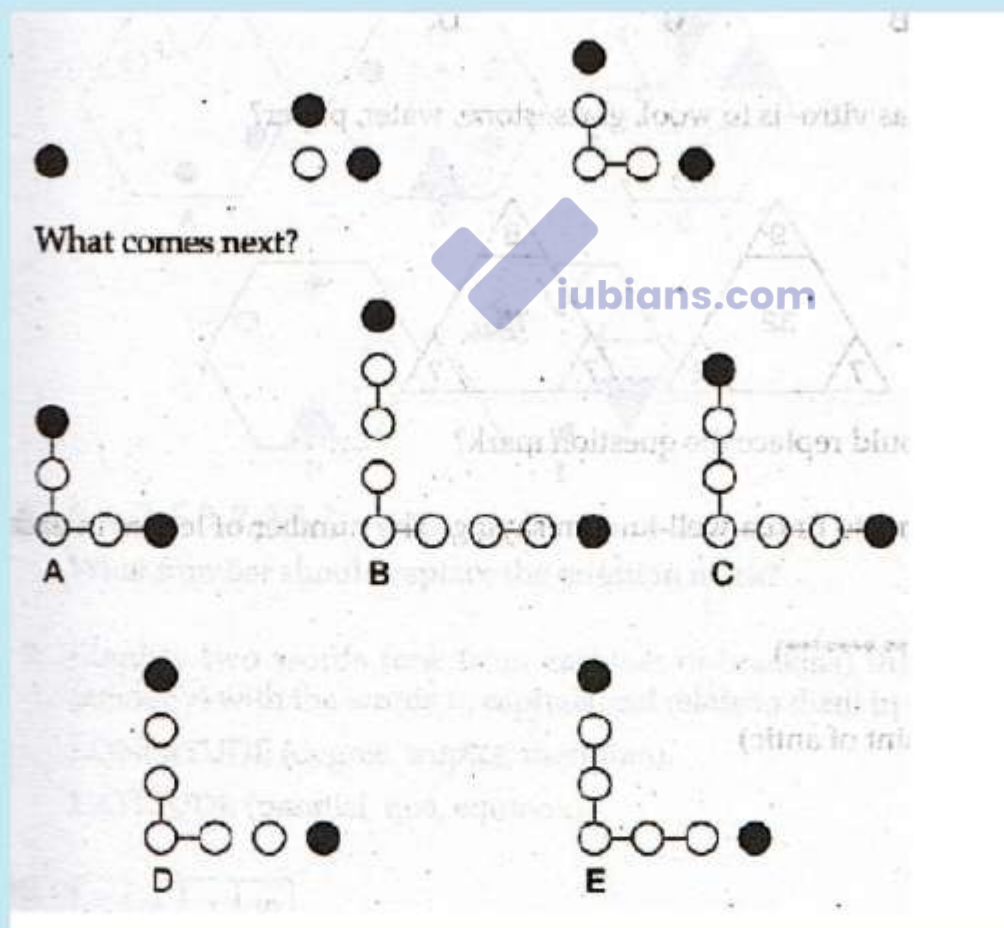
Next page

Question 38

Not yet
answered

Marked out of
1.00

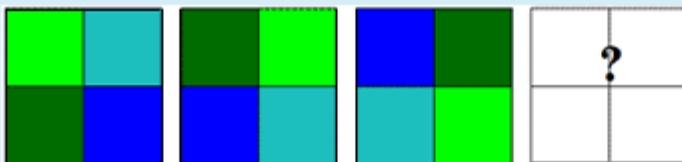
Flag question



Select one:

- ☐ B
- ☐ D
- ☐ E
- ☒ C
- ☐ A

Which square completes this series ?



Select one:

- ☐
- ☐
- ☐
- ☐



Previous page

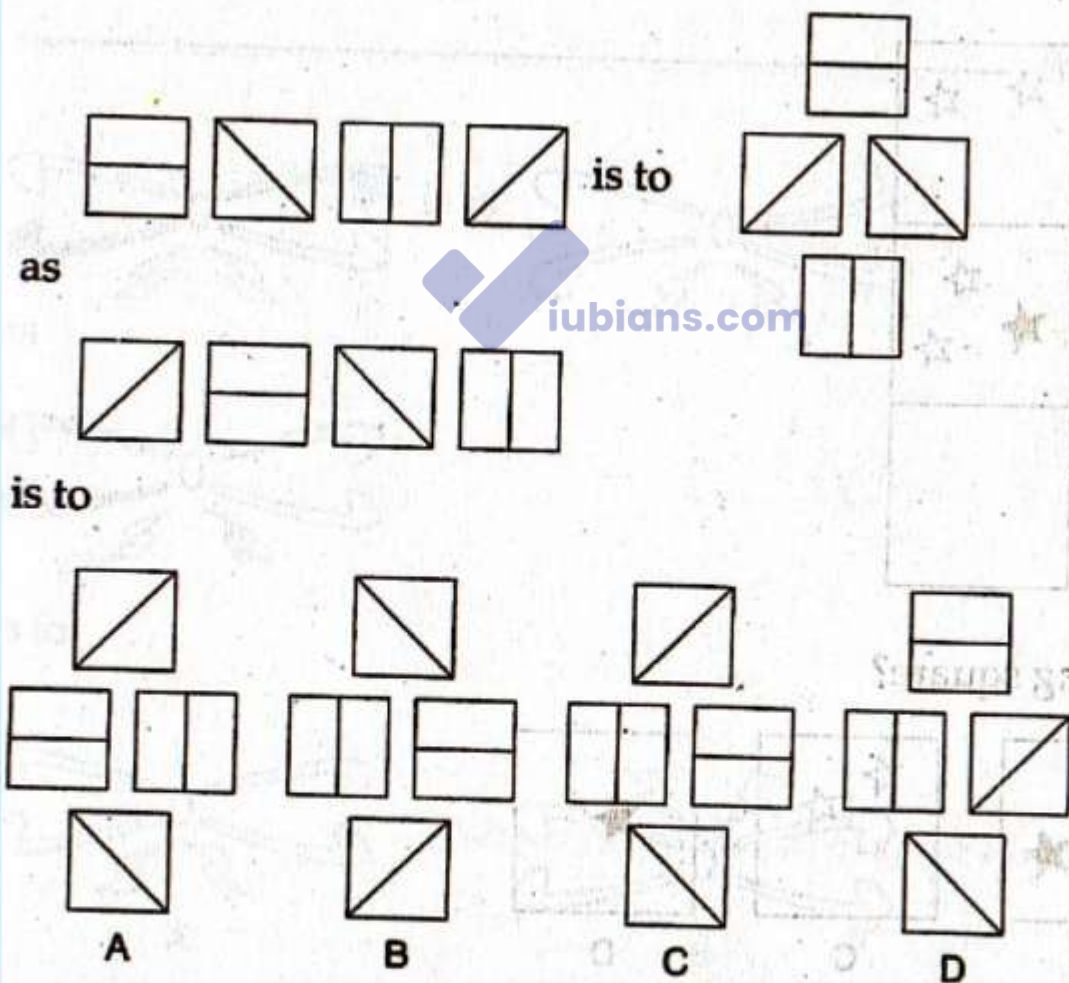
Next page

Quiz navigation



Marked out of
1.00

Flag question



Select one:

- ☐ C
- ☐ D
- ☐ A
- ☐ B

Question **41**

Not yet
answered

Marked out of
1.00

Flag question

We should ____ from bad habits.

Select one:

☒ abstain

☐ refrain

[Clear my choice](#)



[Previous page](#)

[Next page](#)

Quiz navigation



[Finish attempt ...](#)

Time left **0:35:39**

Question **42**

Answer saved

Marked out of
1.00

🚩 Flag question

He did not pay heed to my ____.

Select one:

☐ advice

☒ advise

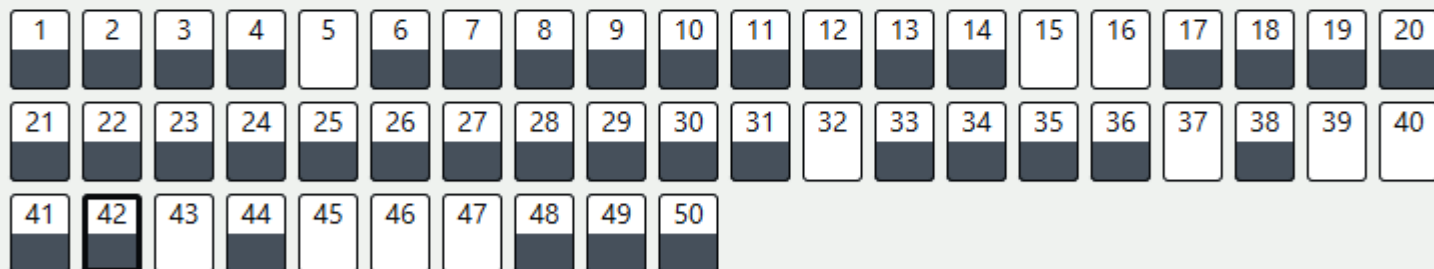
[Clear my choice](#)



[Previous page](#)

[Next page](#)

Quiz navigation



[Finish attempt ...](#)

Time left **0:35:26**

Question **43**

Not yet
answered

Marked out of
1.00

🚩 Flag question

You should ____ yourself to the circumstances.

Select one:

☐ Adopt

☒ Adapt

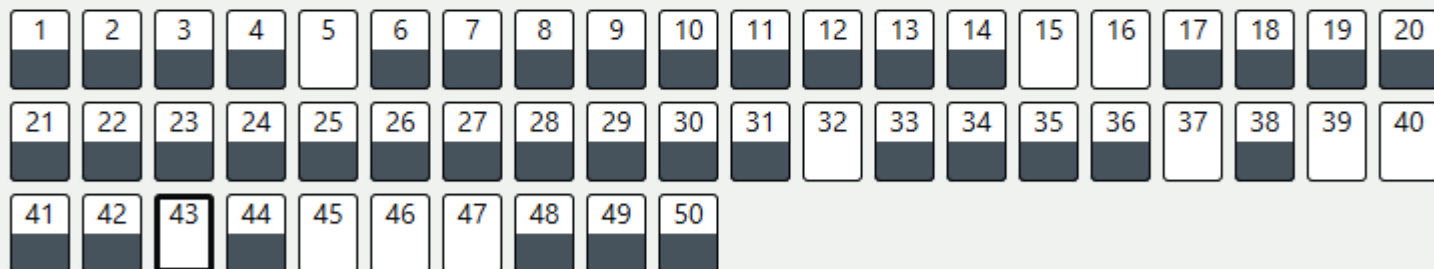
[Clear my choice](#)



[Previous page](#)

[Next page](#)

Quiz navigation



[Finish attempt ...](#)

Time left **0:35:05**

Question **44**

Answer saved

Marked out of
1.00

🚩 Flag question

She has great ____ for her husband.

Select one:

☐ affectation

☒ affection

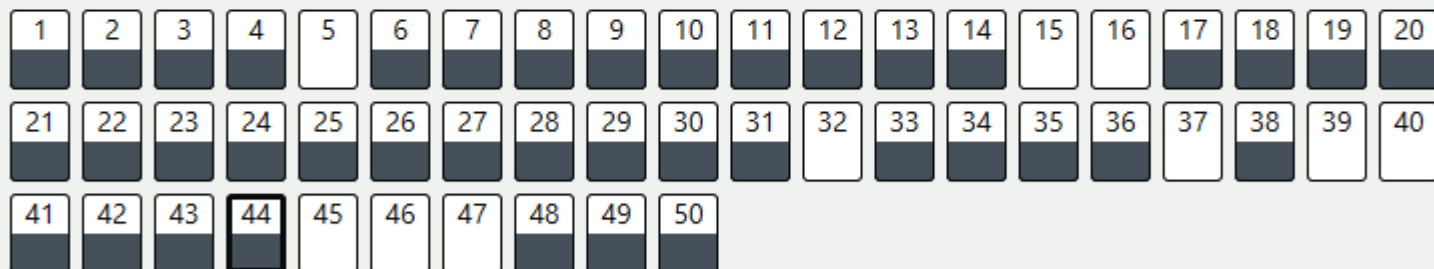
[Clear my choice](#)



[Previous page](#)

[Next page](#)

Quiz navigation



[Finish attempt ...](#)

Time left **0:34:40**

Question **45**

Not yet
answered

Marked out of
1.00

🚩 Flag question

Mr.Asif starts from point A and walks 5 miles, then turns left and walks 4 miles towards north, turns left again and walks 3 miles, in which direction is he going at the end?

Select one:

☒ West

☐ East

☐ South

☐ North

[Clear my choice](#)



Previous page

Next page

Quiz navigation

1	2	3	4	5	6	7	8	9	10	11	12	13	14	15	16	17	18	19	20
21	22	23	24	25	26	27	28	29	30	31	32	33	34	35	36	37	38	39	40
41	42	43	44	45	46	47	48	49	50										

[Finish attempt ...](#)

Time left **0:32:46**

Question **46**Not yet
answeredMarked out of
1.00

Flag question

You have started from a place. After walking for a kilometer, you turn to the left. Then walking for half a km, you again turn to the left. You are going eastwards. In what direction did you originally start?

Select one:

- ☐ South
- ☒ West
- ☐ North
- ☐ East

[Clear my choice](#)[Previous page](#)[Next page](#)

Quiz navigation

1	2	3	4	5	6	7	8	9	10	11	12	13	14	15	16	17	18	19	20
21	22	23	24	25	26	27	28	29	30	31	32	33	34	35	36	37	38	39	40
41	42	43	44	45	46	47	48	49	50										

[Finish attempt ...](#)Time left **0:31:30**

Question **47**Not yet
answeredMarked out of
1.00

Flag question

Ali went 15 m to the north, then he turned west and covered 10 m, then he turned south and covered 5 m, and then he turned east and covered 10 m. In which direction ali is from his starting point?

Select one:

☐ East☒ North☐ South☐ West[Clear my choice](#)[Previous page](#)[Next page](#)

Quiz navigation

1	2	3	4	5	6	7	8	9	10	11	12	13	14	15	16	17	18	19	20
21	22	23	24	25	26	27	28	29	30	31	32	33	34	35	36	37	38	39	40
41	42	43	44	45	46	47	48	49	50										

[Finish attempt ...](#)Time left **0:30:15**

Question **48**

Answer saved

Marked out of
1.00

🚩 Flag question

Pointing to a photograph of a boy Faizan said, "He is the son of the only son of my mother", how is Faizan related to the boy?

Select one:

- ☐ Brother
- ☐ Cousin
- ☒ Father
- ☐ Uncle

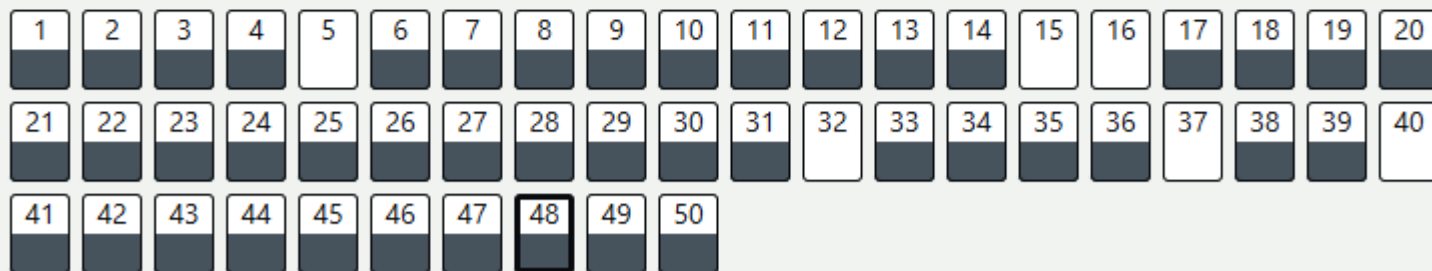
[Clear my choice](#)



Previous page

Next page

Quiz navigation



[Finish attempt ...](#)

Time left **0:29:50**

Question **49**

Answer saved

Marked out of
1.00

🚩 Flag question

My mother is sister of your brother. What am I to you?

Select one:

- ☐ Brother
- ☐ Cousin
- ☐ Uncle
- ☒ Nephew

[Clear my choice](#)



Previous page

Next page

Quiz navigation

1	2	3	4	5	6	7	8	9	10	11	12	13	14	15	16	17	18	19	20
21	22	23	24	25	26	27	28	29	30	31	32	33	34	35	36	37	38	39	40
41	42	43	44	45	46	47	48	49	50										

[Finish attempt ...](#)

Time left **0:29:40**

Question **50**

Answer saved

Marked out of
1.00

🚩 Flag question

Mr. Moeen introduced a girl to his friend and said, "Her mother is the only daughter of my Mother-in-law. What is relationship of that girl to Mr. Moeen?"

Select one:

- ☐ Mother
- ☒ Wife
- ☐ Cousin
- ☐ Daughter

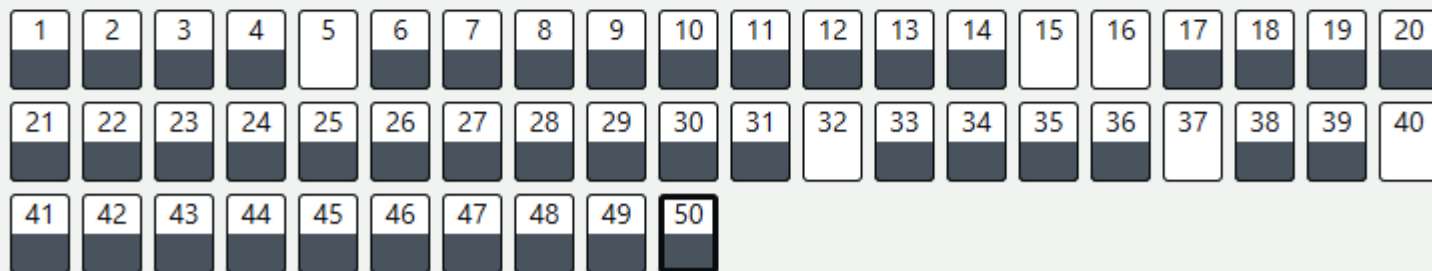
[Clear my choice](#)



[Previous page](#)

[Finish attempt ...](#)

Quiz navigation



[Finish attempt ...](#)

Time left **0:29:13**

IUB Admission Test GAT / Post Graduate Past Papers

3

- [GAT Past paper Download Now](#)
- [NAT , GAT Test Syllabus | Outline | Pattern](#)
- [Take Live Demo Test Now](#)

For more information visit >>



Question **1**

Answer saved

Marked out of
1.00

🚩 Flag question

Can I have a letter of _____ from work?

Select one:

- ☐ None of the mentioned choices
- ☒ Absence
- ☐ Abscene
- ☐ Absance

[Clear my choice](#)



Next page

Question **2**

Answer saved

Marked out of
1.00

🚩 Flag question

Choose the word with correct spelling.

Select one:

- ☒ Detention
- ☐ Detintion
- ☐ Detenssion
- ☐ Detension

[Clear my choice](#)



Previous page

Next page

Question **3**

Answer saved

Marked out of
1.00

🚩 Flag question

Find out the correct spelling (A great writer) ?

Select one:

- ☐ Shakespear
- ☐ None of the mentioned choices
- ☒ Shakespeare
- ☐ Shakspiear

[Clear my choice](#)



Previous page

Next page

Question **4**

Answer saved

Marked out of
1.00

🚩 Flag question

Please _____ the employees on their medical benefits. ?

Select one:

- ☒ Advice
- ☐ Advicee
- ☐ Advis
- ☐ Adwice

[Clear my choice](#)



Previous page

Next page

Question **5**

Answer saved

Marked out of
1.00

🚩 Flag question

Pick the word with correct spelling from below given choices.

Select one:

- ☐ Anticeptic
- ☐ Antisepttic
- ☒ Antiseptic
- ☐ Antiseaptic

[Clear my choice](#)



Previous page

Next page

Question **6**

Answer saved

Marked out of
1.00

🚩 Flag question

Choose the word with correct spelling.

Select one:

- ☐ Exclosive
- ☒ Exclusive
- ☐ Axclusive
- ☐ Execulsive

[Clear my choice](#)



Previous page

Next page

Question **7**

Answer saved

Marked out of
1.00

🚩 Flag question

Choose the word with correct spelling.

Select one:

- ☒ Prestigious
- ☐ Presitigious
- ☐ None of the mentioned choices
- ☐ Prestegeous

[Clear my choice](#)



Previous page

Next page

Question **8**

Answer saved

Marked out of
1.00

🚩 Flag question

There is no exception ____ this rule .

Select one:

- ☒ of
- ☐ from
- ☐ to
- ☐ about

[Clear my choice](#)



Previous page

Next page

Question **9**

Answer saved

Marked out of
1.00

🚩 Flag question

I haven't been to London ____ three years.

Select one:

- ☐ yet
- ☒ for
- ☐ now
- ☐ since

[Clear my choice](#)



Previous page

Next page

Question **10**

Answer saved

Marked out of
1.00

🚩 Flag question

It began to dawn ____ me that murder was right in our midst .

Select one:

- ☐ at
- ☐ upon
- ☒ on
- ☐ about

[Clear my choice](#)



Previous page

Next page

Question **11**

Answer saved

Marked out of
1.00

🚩 Flag question

I ____ a new bike yesterday.

Select one:

- ☐ has Bought
- ☒ bought
- ☐ buy
- ☐ anyone from mentioned choices

[Clear my choice](#)



Previous page

Next page

Question **12**

Answer saved

Marked out of
1.00

🚩 Flag question

The jasmine gives ____ its fragrance at night .

Select one:

- ☐ up
- ☐ at
- ☐ in
- ☒ off

[Clear my choice](#)



Previous page

Next page

Question **13**

Answer saved

Marked out of
1.00

🚩 Flag question

She is lacking ___ courage.

Select one:

- ☐ with
- ☐ of
- ☐ for
- ☒ in

[Clear my choice](#)



Previous page

Next page

Question **14**

Answer saved

Marked out of
1.00

🚩 Flag question

Last summer, we ____ many places ?

Select one:

- ☐ shall visit
- ☐ had visited
- ☐ has visited
- ☒ visited

[Clear my choice](#)



Previous page

Next page

Question **15**

Answer saved

Marked out of
1.00

🚩 Flag question

If you ____ work hard, you will not succeed.

Select one:

- ☒ do not
- ☐ should not
- ☐ will not
- ☐ would not

[Clear my choice](#)



Previous page

Next page

Question **16**

Answer saved

Marked out of
1.00

🚩 Flag question

She has been washing the cloths ____ 8 O'clock.

Select one:

- ☒ since
- ☐ for
- ☐ none of the mentioned choices
- ☐ from

[Clear my choice](#)



Previous page

Next page

Question **17**

Answer saved

Marked out of
1.00

🚩 Flag question

I ____ milking the goat.

Select one:

- ☐ will
- ☐ did not
- ☒ am
- ☐ have

[Clear my choice](#)



Previous page

Next page

IUB-Admission Test (Post Graduate MS/MPhil)-Batch-4-Group-4

Question **18**

Answer saved

Marked out of
1.00

🚩 Flag question

___ they taken meal before the sun set?

Select one:

- ☐ None of the mentioned choices
- ☐ Was
- ☐ Is
- ☒ Had

[Clear my choice](#)



Previous page

Next page

Question **19**

Answer saved

Marked out of
1.00

🚩 Flag question

Everyone in the class raised ____ hands.

Select one:

- ☐ One's
- ☒ their
- ☐ there
- ☐ his

[Clear my choice](#)



Previous page

Next page

Question **20**

Answer saved

Marked out of
1.00

🚩 Flag question

Which number will come next 1, 2, 4, 8, 16,___

Select one:

- ☐ 20
- ☐ 28
- ☐ 24
- ☒ 32

[Clear my choice](#)



Previous page

Next page

Question **21**

Answer saved

Marked out of
1.00

🚩 Flag question

A, E, J, P, __

Select one:

- ☐ Z
- ☒ W
- ☐ S
- ☐ X

[Clear my choice](#)



Previous page

Next page

Question **22**

Answer saved

Marked out of
1.00

🚩 Flag question

Which one is the odd number (different from other) in given series 3 , 5 , 7 , 9 , 11 , 13

Select one:

- ☐ 13
- ☐ 11
- ☒ 9
- ☐ 3
- ☐ 5
- ☐ 7

[Clear my choice](#)



Previous page

Next page

Question **23**

Answer saved

Marked out of
1.00

🚩 Flag question

Which number will come next 64, 32, 16, 8, ____

Select one:

- ☐ 1
- ☐ 2
- ☒ 4
- ☐ 0

[Clear my choice](#)



Previous page

Next page

Question **24**

Answer saved

Marked out of
1.00

🚩 Flag question

Which one (different) is the odd number in given series 3 , 5 , 7 , 9 , 11 , 13

Select one:

- ☐ 11
- ☒ 9
- ☐ 13
- ☐ 7
- ☐ 5
- ☐ 3

[Clear my choice](#)



Previous page

Next page

Question **25**

Answer saved

Marked out of
1.00

🚩 Flag question

What two numbers should come next in series 10 , 30 , 32 , 96 , 98 , 294 , 286 , __ , ?

Select one:

- ☒ 888, 890
- ☐ 858, 860
- ☐ 777, 890
- ☐ 572, 574

[Clear my choice](#)



Previous page

Next page

Question **26**

Answer saved

Marked out of
1.00

🚩 Flag question

Select the right choice that will replace the question mark in series Z Y X , W V U , ? , Q P O

Select one:

- ☐ U T R
- ☐ S T R
- ☒ T S R
- ☐ R T S

[Clear my choice](#)



Previous page

Next page

Question **27**

Answer saved

Marked out of
1.00

🚩 Flag question

$0.003 \times 0.02 = ?$

Select one:

- ☐ 0.0006
- ☐ 0.06
- ☐ 0.006
- ☒ 0.00006

[Clear my choice](#)



Previous page

Next page

Question **28**

Answer saved

Marked out of
1.00

🚩 Flag question

Choose the right simplification of $1 \div 0.04$?

Select one:

- ☐ 1/40
- ☐ 2.5
- ☐ None of the mentioned choices
- ☒ 25

[Clear my choice](#)



Previous page

Next page

Question **29**

Answer saved

Marked out of
1.00

🚩 Flag question

Multiply: 0.002×4.31

Select one:

- ☐ 0.00762
- ☐ 0.862
- ☒ 0.00862
- ☐ 0.0862

[Clear my choice](#)



Previous page

Next page

Question **30**

Answer saved

Marked out of
1.00

🚩 Flag question

$$3.1469 + 6.837 + ? = 15$$

Select one:

- ☒ 5.0161
- ☐ 24.9839
- ☐ 5.0169
- ☐ 5.7634

[Clear my choice](#)



Previous page

Next page

Question **31**

Answer saved

Marked out of
1.00

🚩 Flag question

Select the product of $0.013 \times 18.2 = \underline{\hspace{1cm}}$?

Select one:

- ☒ 0.2366
- ☐ 0.02366
- ☐ 0.023667
- ☐ None of the mentioned choices

[Clear my choice](#)



Previous page

Next page

Question **32**

Answer saved

Marked out of
1.00

🚩 Flag question

What is mode of 52,50,52,18,7,2,3,18,5,7,5,3,2,2,2?

Select one:

- ☐ 1
- ☐ 7
- ☐ 2
- ☒ 18

[Clear my choice](#)



Previous page

Next page

Question **33**

Answer saved

Marked out of
1.00

🚩 Flag question

Average of 8 numbers is 31, seven of them are 15,45,17,19,33,48,65. What is the eighth number?

Select one:

- ☐ 15
- ☒ 6
- ☐ 23
- ☐ 34

[Clear my choice](#)



Previous page

Next page

Question **34**

Answer saved

Marked out of
1.00

🚩 Flag question

Let X be the median, and Y the mode of the following set of numbers: 15, 60, 30, 40, 60 and 90. What is the average (arithmetic mean) of X and Y?

Select one:

- ☐ 60
- ☐ 50
- ☒ 55
- ☐ 62.5

[Clear my choice](#)



Previous page

Next page

Question **35**

Answer saved

Marked out of
1.00

🚩 Flag question

What is the Average of 12, 15 and 18?

Select one:

- ☒ 15
- ☐ 13
- ☐ 12
- ☐ 14

[Clear my choice](#)



Previous page

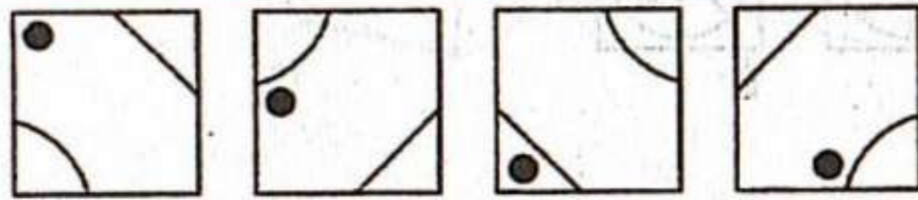
Next page

Question 36

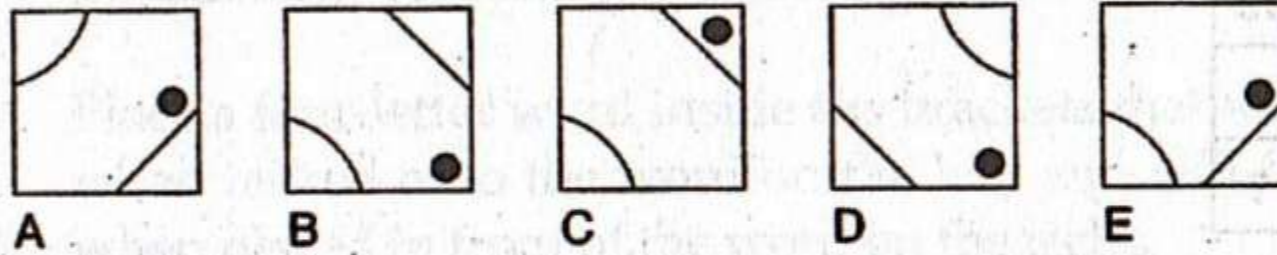
Answer saved

Marked out of
1.00

Flag question



What comes next in the above sequence?



Select one:

- ☐ E
☒ D
☐ A
☐ B
☐ C

[Clear my choice](#)



Previous page

Next page


Question **37**

Answer saved

Marked out of
1.00

🚩 Flag question

How many lines appear below?




Select one:

Question 38

Answer saved

Marked out of
1.00

Flag question



Select one:

- ☐ A
- ☐ B
- ☒ H
- ☐ G
- ☐ E
- ☐ C
- ☐ D
- ☐ F

Clear my choice



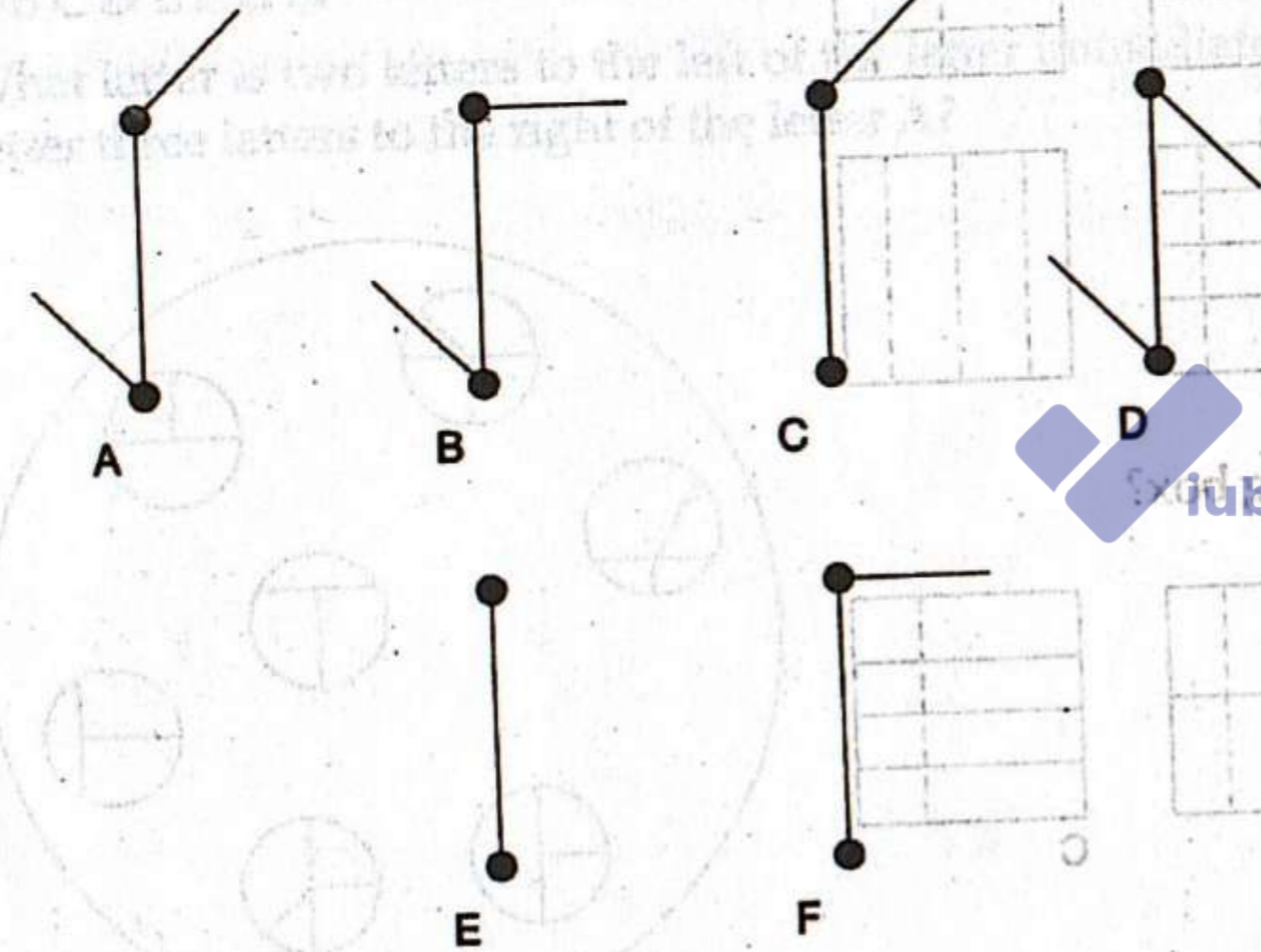
Question 39

Answer saved

Marked out of
1.00

Flag question

What comes next?




Question **40**

Answer saved

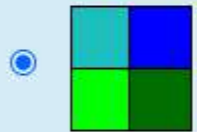

Marked out of
1.00

🚩 Flag question

Which square completes this series ?



Select one:



[Clear my choice](#)



Question **41**

Answer saved

Marked out of
1.00

🚩 Flag question

Say ____ in this regard.

Select one:

- ☐ Ought
- ☒ Aught

[Clear my choice](#)



Previous page

Next page

Question **42**

Answer saved

Marked out of
1.00

🚩 Flag question

____ of money makes people proud.

Select one:

- ☐ Access
- ☒ Excess

[Clear my choice](#)



Previous page

Next page

Question **43**

Answer saved

Marked out of
1.00

🚩 Flag question

We should ____ from bad habits.

Select one:

☐ refrain

☒ abstain

[Clear my choice](#)



Previous page

Next page

Question **44**

Not yet
answered

Marked out of
1.00

🚩 Flag question

They ____ that he had been very rude to me.

Select one:

☐ accede

☐ concede



Previous page

Next page

Question **44**

Not yet
answered

Marked out of
1.00

🚩 Flag question

They ____ that he had been very rude to me.

Select one:

☐ accede

☐ concede



Previous page

Next page

Question **45**

Not yet
answered

Marked out of
1.00

🚩 Flag question

Bushra and Sana travel 5 km to the north. They turn to the right and travel 2 km. Again they turn to their right and travel 5 km. How many kms. away are they from the starting point?

Select one:

- ☐ 10
- ☐ 2
- ☐ 12
- ☐ 7

Previous page

Next page

Question **46**

Not yet
answered

Marked out of
1.00

🚩 Flag question

Aslam who is facing south turns to his left and walks 8 meters. Then he faces north and walks 25 meters, then turning to his left he walks a few meters so that he is 25 meters away from the original position. What is the total distance in meters covered by him?

Select one:

- ☐ 25
- ☐ 33
- ☐ 41
- ☐ None of the mentioned choices



Previous page

Next page

Question **47**

Answer saved

Marked out of
1.00

🚩 Flag question

Mr.Asif starts from point A and walks 5 miles, then turns left and walks 4 miles towards north, turns left again and walks 3 miles, in which direction is he going at the end?

Select one:

- ☐ North
- ☐ West
- ☐ East
- ☒ South

[Clear my choice](#)



Previous page

Next page

Question **48**

Answer saved

Marked out of
1.00

🚩 Flag question

P, the daughter of K is married to G. X and G are brothers, on the basis of this information tell how P is related to G?

Select one:

- ☐ Sister
- ☐ Niece
- ☒ Wife
- ☐ Daughter
- ☐ Cousin

[Clear my choice](#)



Previous page

Next page

Question **49**

Answer saved

Marked out of
1.00

🚩 Flag question

Ahmed and his wife has seven daughters and each daughter has one brother. How many people are there in the Ahmed's family?

Select one:

- ☐ 20
- ☐ 5
- ☒ 10
- ☐ 15

[Clear my choice](#)



Previous page

Next page

Question **50**

Answer saved

Marked out of
1.00

🚩 Flag question

Kamal is older than Jamal, Jamal is older than Hussain, Hussain is older than Waqar, who is the oldest?

Select one:

- ☐ Jamal
- ☐ Waqar
- ☐ Hussain
- ☒ Kamal

[Clear my choice](#)



Previous page

Finish attempt ...